

E.M.E.F. MARIA ARLETE BITENCOURT LODETTI

ALUNO: \_\_\_\_\_ SÉRIE: \_\_\_\_\_

PROFESSOR: \_\_\_\_\_


AUXILIAR: \_\_\_\_\_ DATA: \_\_\_\_/\_\_\_\_/\_\_\_\_




Visto da coordenadora

## AVALIAÇÃO DE MATEMÁTICA


### 1- PINTE DE ACORDO COM A LEGENDA .



VERDE



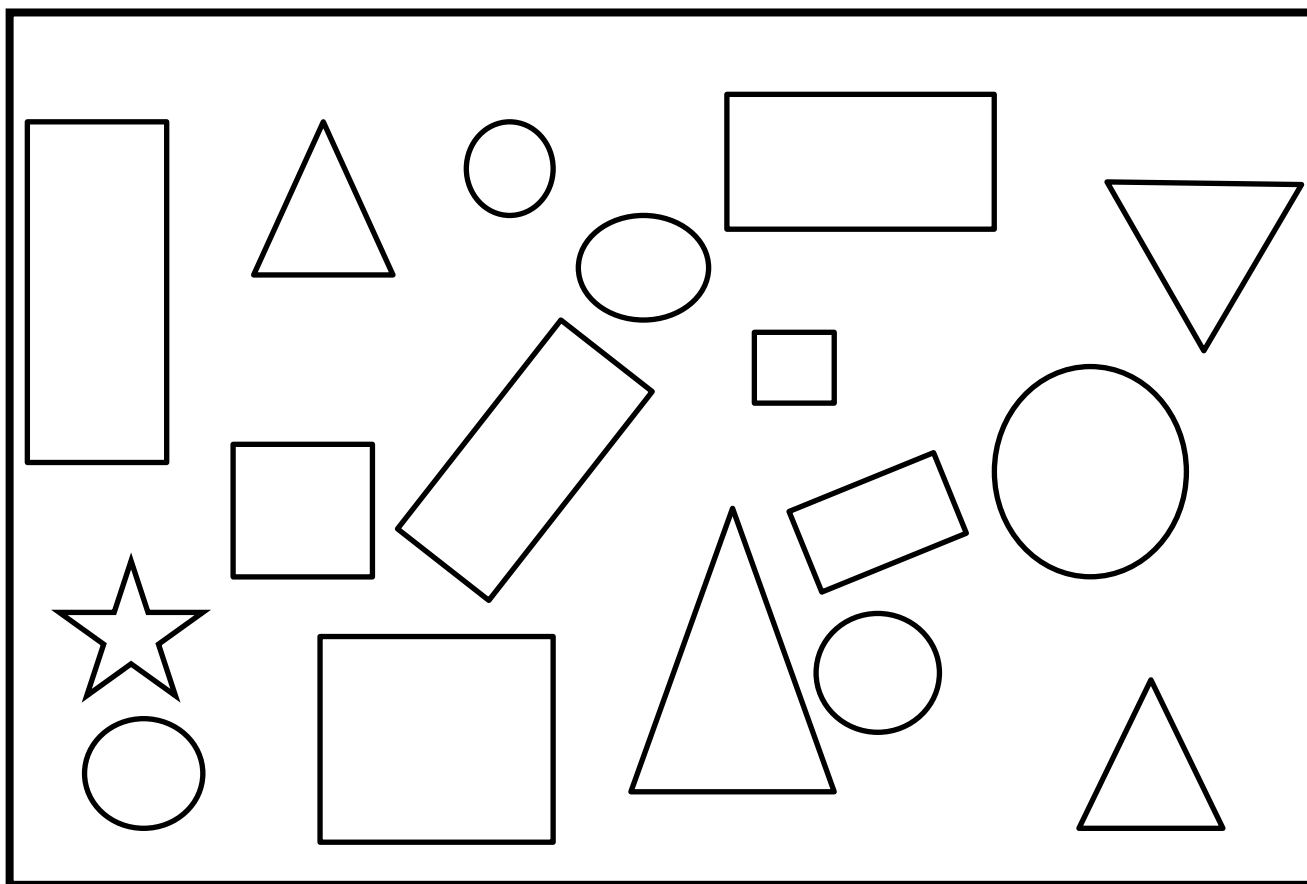
AZUL



VERMELHO



AMARELO





**2- PINTE AS BARRINHAS DE ACORDO COM O VALOR DE CADA UMA.**

[illegible]




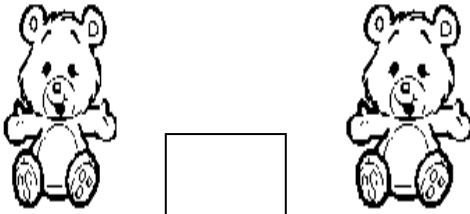
3-EFETUE CORRETAMENTE AS OPERAÇÕES:

$\begin{array}{r} 5 \\ + 6 \\ \hline \end{array}$	$\begin{array}{r} 15 \\ + 3 \\ \hline \end{array}$	$\begin{array}{r} 7 \\ + 9 \\ \hline \end{array}$	$\begin{array}{r} 19 \\ - 6 \\ \hline \end{array}$	$\begin{array}{r} 17 \\ - 5 \\ \hline \end{array}$
---	--	---	--	--

4- COMPLETE A TABELA COM OS NÚMEROS QUE FALTAM.


1	2		4	5		7			10
	12	13		15			18		20
21			24			27		29	30

5-CONSULTE A TABELA E ESCREVA A QUANTIDADE DE ELEMENTOS NO QUADRINHO:

 <div style="border: 1px solid black; width: 50px; height: 30px; margin-left: 450px;"></div>	 <div style="border: 1px solid black; width: 50px; height: 30px; margin-left: 450px;"></div>
 <div style="border: 1px solid black; width: 50px; height: 30px; margin-left: 450px;"></div>	 <div style="border: 1px solid black; width: 50px; height: 30px; margin-left: 450px;"></div>

6- DESENHE 16 LARANJAS:

7-RESOLVA OS PROBLEMAS:



NO CHIQUEIRO HAVIA 8 PORQUINHOS.  
SAÍRAM 2 PORQUINHOS.

8

- 2

AGORA EXISTEM \_\_\_\_\_

PORQUINHOS NO CHIQUEIRO.



BOA PROVA!